



VSPKTM
INTERNATIONAL SCHOOL
Sector-13, Rohini, New Delhi-110085



HAPPY HOLIDAYS

SESSION 2025-26

**"In the Chills of winter,
let the learning continue."**





Message from Principal

Dear Parents and Students,

Let this time of the year be significant in recreating family bonds, rejuvenating ourselves and creating memories that will last for long. Along side the family vacation, it is imperative to make the students invest their time in enhancing their skills and aptitude, the school has specially designed theme based practice sheets for each grade to enhance the critical thinking ability of the students. We are certain that each one of you will fetch the maximum benefits out of it. We hope that the time spent with near and dear ones would infuse revived energies. Eagerly waiting to see you all back on **12th January 2026.**

**Wish you all a very
Happy Winter Time!**



Dear Student

Vacation is a time to pause, reflect, explore and grow. To support balanced development, **VSPK International School** will observe Winter Vacation from **1st January 2026 to 11th January 2026**. However, learning does not stop during holidays--it simply takes a new form. The Holiday practice sheet designed for you is an experiential learning journey, not a routine task. It encourages a learning continuum during vacation.

Through these activities, you will: Strengthen critical thinking and problem-solving skills, enhance creativity, communication and imagination, apply classroom concepts to real-life situations. You are encouraged to work independently, take ownership of learning and enjoy discovering new ideas at your own pace.

Dear Parent

As we step into a new year, this winter break provides an excellent opportunity to nurture competency-based learning, well-being and life skills at home.

We request your cooperation in encouraging your child to:

- ❖ Follow healthy self-care routines and hygiene practices
- ❖ Participate in physical activities and outdoor play for fitness and emotional well-being
- ❖ Choose nutritious, homemade food and understand healthy living habits
- ❖ Explore hobbies, reading, art, music, or innovation-based activities
- ❖ Identify and strengthen core skills such as reading fluency, writing expression, numeracy, communication and handwriting
- ❖ Revise key concepts to ensure continuity, retention and readiness for the next learning phase

This integrated approach supports learning outcomes, builds confidence and nurtures responsible, reflective and skilled learners.

Submission Date: 15th January 2026

We wish our students a vacation filled with curiosity, creativity, joyful learning and family bonding.

Wishing you and your family a happy and prosperous new year 2026.

Warm regards,

VSPK International School



Note : All Practice sheets to be done in their respective notebook.

ENGLISH

Q1. Read the passage given below carefully.

Jellyfish are jelly-like free swimming marine animals found in every ocean in every corner of the planet. But despite their name, jellyfish aren't actually fish. Fish are vertebrates that live in water and breathe through their gills. Jellyfish, on the other hand, are invertebrates, or animals with no backbones. They have no heart, no brain, no kidney, no lungs or gills, and no blood.

The main feature of jellyfish is their umbrella-like body called 'bell' inside which is an opening that is its mouth. Hanging from the bell are thin 'tentacles' which have tiny stinging cells to stun or paralyze the prey. Jellyfish use these tentacles to feel, move and capture their prey. They may also be used to defend against predators. Among their many tentacles, some jellyfish have parts known as 'oral arms' which move the captured prey to the animal's mouth.

Only about 5% of the body of jellyfish is solid matter; the remaining 95% is water. These aquatic creatures live anywhere from 3-6 months and range in size from less than an inch to over 7 feet long. They mainly feed on fish, shrimp, crabs and tiny plants. Sea turtles relish the taste of jellyfish. Some jellyfish are clear, but others are in vibrant colours such as pink, yellow, blue and purple and often glow in the dark.

(i) On the basis of your understanding of the passage, write 'T' against the statements that are True and 'F' against the ones that are False.

- (a) Jellyfish are found all over the world. _____
- (b) Jellyfish aren't really a type of fish. _____

(ii) List two different uses of the 'tentacles' as mentioned in the passage.

(iii) "Jellyfish are not actually fish." Justify the statement.

(iv) How does the jellyfish capture its prey?

(v) According to the given text, if the jellyfish were to order food in a marine restaurant, which are the food items it would NOT order.

- (a) shrimp
- (b) crabs
- (c) tiny plants
- (d) salmon



Q2. Read the passage given below and answer the following questions.

Many centuries ago, India was home to some of the greatest minds who made significant discoveries in the fields of Science and Astronomy, introducing ideas that the world had not known before.

Acharya Charaka was a noted practitioner of Ayurveda, a system of medicine that originated in ancient India. Widely known as the "father of Indian medicine, he is said to have developed the basic principles of Ayurveda. His principles, cures, and diagnoses hold true even today.

One of the earliest surgeons known to the world, Sushruta, lived and practiced his art in present-day Varanasi. In his famous work Sushruta Samhita, he described over 120 surgical instruments and eight categories of surgical procedures. He was the first person to conduct plastic surgery. His technique of reconstructing noses is followed almost unchanged to this day.

Aryabhatta was a renowned Mathematician and astronomer of the classical age of India. His contribution to the field of Mathematics is unparalleled, but he is best known for coming up with the concept of zero in the numerical system. In the field of Astronomy, he was the first one to propose that the Earth rotates on its own axis, which causes day and night. He also proposed that the Earth revolves around the Sun, which causes the change of seasons. He even concluded that the moon is dark and it shines because of the light of the Sun.

(i) Choose any two proper nouns from the passage:

- (a) India, practitioner
- (b) Sushruta, Aryabhatta
- (c) Mathematician , astronomer
- (d) Surgeons, Astronomy

(ii) Choose the synonym for the word 'finding out' from the passage:

- (a) concluded
- (b) invention
- (c) discovery
- (d) contribution



Day and Night



(iii) In whose notes would you find this diagram?

- (a) Sushruta
- (b) Aryabhatta
- (c) Acharya Charaka
- (d) Ramanujan

(iv) The name of the book written by Sushruta was:

- (a) Sushruta Samhita
- (b) Father of Indian medicine
- (c) Ayurveda
- (d) Aryabhatiyam

v) Match the names of the people in Column A with their contributions in Column B.

COLUMN A	COLUMN B
a) Sushruta	i) came up with the concept of zero
b) Aryabhatta	ii) conducted the first ever plastic surgery

Q 3. Read the poem given below carefully and answer the following questions:

Rain O Rain, come again, Drive
away sorrow and pain.

Make the air fresh

Make it full of sweet smell Bring
laughter and joy to all.

When it is raining, the trees look so green.

Thick clouds cover the sun Everybody
on earth is having fun.

Whenever I get a chance, I go out and dance.
And have lots of fun, In the pouring rain, Rain
O Rain, come again.



- (a) Give a suitable title to the poem.
- (b) Write a pair of rhyming words from the poem.
- (c) On the basis of understanding of the poem write T for true statement and F for false statements:

Rain comes and takes away sorrow and pain. _____

Rain comes and brings sadness to all. _____

- (d) Write the synonym of '**pleasure**' from the above poem.
- (e) Explain how you feel when it rains.

Q4. Write a letter to your best friend telling him about your new school and friends in about 100-120 words.

Q5. Write a letter to your friend inviting him to spend winter vacations at your place in Mumbai in about 120-150 words.

Q6. Develop a story with the help of the outline given below in about 100-120 words. Also give a suitable title and write the moral of the story.

HINTS:

A dog.....greedy.....gets a piece of meat.....crossing a bridge..... sees his reflection
.....thinks.....another dogbarks.....his meat fallsinto the water.

Q7. Develop a story with the help of the outline given below in about 100-120 words. Also give a suitable title and write the moral of the story.

Hints:

Heavy rain—Streets flooded—Friends go out to play—Slipping and splashing—

Mother scolds----- Fun memories



Q8. Underline the adjective and write its kind.


1. My brother has a new bicycle.
2. There are many students in the class.
3. She bought three pencils.
4. These flowers are fresh.
5. This is her book.

9. Fill in the blanks with suitable adjectives.

1. The elephant is a _____ animal.
2. I have _____ friends in my school.
3. She drank _____ water after the game.
4. This is _____ bag.
5. We live in a _____ city.

Q10. Choose the correct adjective from the brackets.

1. There are _____ apples in the basket. (much/many)
2. This is _____ umbrella. (a/an)
3. She has _____ hair. (long/length)
4. I like _____ mangoes. (this/these)
5. He has _____ money. (some/few)



Q11. Choose the correct degree of comparison.

1. This box is _____ than that one.
 - a) heavy
 - b) heavier
 - c) heaviest
2. Mount Everest is the _____ mountain in the world.
 - a) high
 - b) higher
 - c) highest
3. My house is _____ than yours.
 - a) big
 - b) bigger
 - c) biggest
4. She is the _____ girl in the class.
 - a) intelligent
 - b) more intelligent
 - c) most intelligent
5. Today is _____ than yesterday.
 - a) hot
 - b) hotter
 - c) hottest

Q12. Choose the correct option.

1. Which is the **superlative** form of *good*?
 - a) gooder
 - b) better
 - c) best
2. Which sentence shows the **comparative** degree?
 - a) This is a sweet mango.
 - b) This mango is sweeter than that one.
 - c) This is the sweetest mango.



3. Which is the **positive** degree of *tall*?
 - a) tall
 - b) taller
 - c) tallest
4. Which word is in the **comparative** degree?
 - a) biggest
 - b) big
 - c) bigger

Q13. Answer the following questions with reference to the context.

“And as she talked and tossed her head and switched her shining trail, The staid old mother star grew sad, her cheeks grew wan and pale”.

- a. Who is ‘she’ in the above stanza ?
- b. What does growing ‘wan and pale’ signify?
- c. Name the poet of the above lines.

Q14. How did every member of the family react when Charlie found the Golden Ticket?

Q15. Give a character sketch of Tenali Raman in your own words.



MATHS

Q1. Complete the following patterns:

- What is the next number in this pattern? 5, 10, 15, _____, 25, _____
- Write the next 3 even numbers after 18.

Q2. If your class starts at 8:00 AM and each lesson is 30 minutes long, what time will it be after 3 lessons?

Q3. Find the perimeter of the following shapes:

- a) A rectangle with side lengths 5 cm and 7 cm.
- b) A square with side length 4 cm.

Q4. If the length of a rectangle is 8 cm and the width is 6 cm, what is the perimeter of the rectangle?

Q5. The perimeter of a square is 120 cm. How long is each side of the square?

Q6. Draw the hands of a clock to show the following times:

- a) 3:30
- b) 7:15
- c) 12:45

Q7. If your class starts at 9:00 AM and ends at 11:30 AM, how long is your class?

Q8. Convert the following times to minutes:

- a) 2 hours
- b) 1 hour and 30 minutes
- c) 45 minutes

Q9. What time will it be 2 hours after 3:45 PM?

Q10. You went on vacation on 10th June and returned on 20th June. How many days did your vacation last?



Q11.Movie Ticket Bill:

Adult Ticket (2) - ₹150 each Child Ticket (1) - ₹100 Snacks - ₹50

- How much did 2 adult tickets cost?
- How much was the total cost for the tickets and snacks?
- If you paid ₹600 for the bill, how much change did you get?

Q12. Convert the 12-hour clock to 24-hour clock and vica-versa.

- 9:15 a.m
- 1620 hours
- 10:36 p.m
- 2125 hours
- 6:28 p.m

Q13. The table given below shows the sowing and harvesting date of different vegetables.

Read it carefully and answer the following questions:

Peas	26 th April to 27 th June	
Onions	10 th September to 16 th February	
Potatoes	17 th November to 31 st January	
Carrot	30 th December to 12 th March	

- Calculate the number of days each plant takes to grow.
- Name the vegetable which took the least number of days to grow?
- Name the vegetable which took the maximum number of days to grow?

Q14. Prepare a bill for the following items

- 3 story books for ₹150 each.
- 20 paper bags for ₹12 each.
- 2 comics for ₹224 each.

Q15. Anisha saved ₹ 516 every day for 3 weeks. How much money did she save

EVS

Section A

I Write one word for each:

- Keeping our surroundings clean is called _____.
- Waste from kitchens like fruit peels is _____ waste.



- 3) Throwing waste in open areas causes _____.
- 4) The green coloured bin is used for _____ waste.
- 5) The place where garbage is dumped is called a _____.
- 6) Flies and mosquitoes spread _____.
- 7) The flat part of the leaf _____
- 8) Plant part that is meant for storing food _____
- 9) Small plants growing from the seeds _____
- 10) Plant with a weak stem that cannot hold the plant straight _____

Section B

II Answer the following questions.

- 1) Why should we keep our surroundings clean? (2 lines)

- 2) Name any two habits of a clean child.

- 3) Name any five components of air besides oxygen.



SECTION C

Case-Based Study Questions

Case 1:

Riya noticed that garbage was thrown near her school gate. Flies were sitting on it and it smelled bad. Many children started falling sick.

Answer the questions:

4) Why did the area smell bad?

5) Name one disease that can spread due to dirty surroundings.

6) What should Riya and her friends do to keep the area clean?


III. Look at the picture of the Solar System (given in the chapter) and name the following:

- (a) The smallest planet
- (b) The Earth's place from the Sun
- (c) The planet that is called the red planet
- (d) The only planet to have life on it
- (e) The planet that has rings around it
- (f) The largest planet




Section D

III Explain water cycle with the help of a diagram.



IV Draw a well - labelled diagram of the life cycle of a butterfly.



हिंदी (पठन कौशल)

प्रश्न-1) निम्नलिखित अपठित गद्यांश को पढ़कर दिए गए प्रश्नों के उत्तर लिखिए-

सर्दियों का मौसम वर्ष का सबसे सुहावना समय होता है। इस मौसम में ठंडीठंडी हवा - सुबह कोहरा छाया रहता है। सर्दियों - चलती है और लोग ऊनी कपड़े पहनते हैं। सुबह अमरूद और गाजर जैसी सब्जियाँ और फल अधिक मिलते हैं। लोग , संतरा , में सेब गरम भोजन खाना पसंद करते हैं। सर्दी के - इस मौसम में अलाव तापते हैं और गरम मौसम में हमें अपने स्वास्थ्य का विशेष ध्यान रखना चाहिए।

प्रश्न

क) सर्दियों का मौसम कैसा होता है?

उत्तर _____

ख) लोग सर्दियों में कौन से कपड़े पहनते हैं?


उत्तर _____

ग) सर्दियों में कौन-कौन से फल और सब्जियाँ मिलती हैं?

उत्तर _____

घ) लोग सर्दियों में क्या करना पसंद करते हैं?

उत्तर _____



इ) इस मौसम में हमें किस बात का ध्यान रखना चाहिए?

उत्तर _____

(व्याकरण)

प्रश्न-2) निम्नलिखित मुहावरों के सही उत्तर लिखिए -

क) ईद का चाँद होना - _____

ख) दिल बाग-बाग होना - _____

ग) नौ-दो ग्यारह होना - _____

घ) अंधे की लाठी - _____

प्रश्न-3) निम्नलिखित शब्दों के सही विलोम लिखिए-

क) सत्य - _____ ख) सुबह - _____

ग) साफ़ - _____ घ) अमीर - _____

प्रश्न-4) निम्नलिखित शब्दों के दो-दो पर्यायवाची लिखिए -

क) बगीचा - _____ , _____

ख) माँ - _____ , _____

ग) मेघ - _____ , _____

घ) निशा - _____ , _____



प्रश्न-5) निम्नलिखित वाक्यांशों के लिए एक शब्द लिखिए -

- क) पहाड़ों में रहने वाला - _____
ख) शहर में रहने वाला - _____
ग) प्रतिदिन होने वाला - _____
घ) मिठाई बनाने वाला - _____

(अशुद्धि शोधन)

प्रश्न-6) निम्नलिखित शब्दों के शुद्ध रूप लिखो।

- क) मिठाईयां - _____
ख) कारन - _____
ग) त्यौहार - _____
घ) शनीवार - _____
ङ) गांव - _____



Happy New Year

"As we welcome 2026,
let's celebrate
the power of education
to transform lives."



Contact : 8588822255 | 9205928881

Email: vspkschool@yahoo.co.in | Web: www.vspkinternational.edu.in



Instagram



Facebook



Website



Location