



VSPKTM
INTERNATIONAL SCHOOL
Sector-13, Rohini, New Delhi-110085



HAPPY HOLIDAYS

SESSION 2025-26

**"In the Chills of winter,
let the learning continue."**





Message from Principal

Dear Parents and Students,

Let this time of the year be significant in recreating family bonds, rejuvenating ourselves and creating memories that will last for long. Along side the family vacation, it is imperative to make the students invest their time in enhancing their skills and aptitude, the school has specially designed theme based practice sheets for each grade to enhance the critical thinking ability of the students. We are certain that each one of you will fetch the maximum benefits out of it. We hope that the time spent with near and dear ones would infuse revived energies. Eagerly waiting to see you all back on **12th January 2026.**

**Wish you all a very
Happy Winter Time!**





Dear Student

Vacation is a time to pause, reflect, explore and grow. To support balanced development, **VSPK International School** will observe Winter Vacation from **1st January 2026 to 11th January 2026**. However, learning does not stop during holidays--it simply takes a new form. The Holiday practice sheet designed for you is an experiential learning journey, not a routine task. It encourages a learning continuum during vacation.

Through these activities, you will: Strengthen critical thinking and problem-solving skills, enhance creativity, communication and imagination, apply classroom concepts to real-life situations. You are encouraged to work independently, take ownership of learning and enjoy discovering new ideas at your own pace.

Dear Parent

As we step into a new year, this winter break provides an excellent opportunity to nurture competency-based learning, well-being and life skills at home.

We request your cooperation in encouraging your child to:

- ❖ Follow healthy self-care routines and hygiene practices
- ❖ Participate in physical activities and outdoor play for fitness and emotional well-being
- ❖ Choose nutritious, homemade food and understand healthy living habits
- ❖ Explore hobbies, reading, art, music, or innovation-based activities
- ❖ Identify and strengthen core skills such as reading fluency, writing expression, numeracy, communication and handwriting
- ❖ Revise key concepts to ensure continuity, retention and readiness for the next learning phase

This integrated approach supports learning outcomes, builds confidence and nurtures responsible, reflective and skilled learners.

Submission Date: 15th January 2026

We wish our students a vacation filled with curiosity, creativity, joyful learning and family bonding.

Wishing you and your family a happy and prosperous new year 2026.

Warm regards,

VSPK International School



Note:All practice sheets to be done in the respective notebook.

ENGLISH

✨ Section A: Unseen Passage (Reading Skill)

Task 1: Reading Explorer

Read the unseen passage given below carefully and answer the questions that follow.

Passage:

Winter mornings often bring a quiet beauty with them. The air feels crisp, and everything appears calm and fresh. People wake up wrapped in warm clothes, sipping hot tea or milk to start their day. Birds gather near windows in search of warmth and food. Although winter days are shorter, they offer a chance to slow down, reflect, and enjoy simple pleasures like reading, storytelling, and spending time with family.

Questions:

1. Why do winter mornings feel special?
2. What do people usually do to keep themselves warm?
3. Find a word from the passage that means “**cool and fresh**”.
4. Why are winter days good for reflection?
5. Write one sentence describing a winter morning in your own words.

✨ Section B: Grammar Time

Task 2: Grammar Detective

A. **Identify the parts of speech** (noun, verb, adjective, adverb) of the underlined words:

1. The **quiet** morning made everyone feel calm.
2. Birds **gathered** near the window.
3. She spoke **softly** to her grandmother.



B. **Fill in the blanks** with suitable articles (a, an, the):

1. ____ owl sat on ____ old tree.
2. She wore ____ warm sweater.

C. **Change the tense** (Simple Present to Simple Past):

1. Children play in the park.
2. She reads a story every night.

✨ Section C: Vocabulary Fun

Task 3: Winter Word Bank

A. Write meanings of the following words and use **any two** in sentences:

- Crisp
- Reflect
- Gather
- Pleasure

B. Make **one new word** from each:

- Warm
- Play
- Read

C. Write **two synonyms** for *happy* and *cold*.


🌱 Bonus Creative Task (Optional):

Create a **mini winter journal** about one day of your winter holidays.

हिंदी

- कला एकीकृत परियोजना (Art-Integrated Project)

📖 दिल्ली, लक्षद्वीप और अंडमान निकोबार के 'पर्यटक स्थल' पर "प्रचार-पत्रिका" (Brochure) चित्र सहित तैयार कीजिए।



पठन कौशल

प्रश्न 1. निम्नलिखित अपठित गद्यांश को ध्यानपूर्वक पढ़कर पूछे गए प्रश्नों के उत्तर लिखिए:-

विद्यार्थी जीवन वह समय होता है जब व्यक्ति अपने भविष्य के सपने देखता है और उन्हें पूरा करने की तैयारी करता है। इस अवस्था में किया गया परिश्रम और अपनाया गया अनुशासन जीवन की दिशा तय करता है। लक्ष्य के बिना किया गया परिश्रम सही परिणाम नहीं देता, इसलिए विद्यार्थियों के लिए लक्ष्य निर्धारण अत्यंत आवश्यक है। एक लक्ष्यवान विद्यार्थी अपने समय का सही प्रबंधन करता है। वह पढ़ाई, खेलकूद और विश्राम के बीच संतुलन बनाकर चलता है। ऐसे विद्यार्थी कठिनाइयों से डरते नहीं, बल्कि उन्हें चुनौती समझकर स्वीकार करते हैं। असफलता मिलने पर वे निराश होने के बजाय अपनी कमियों को पहचानते हैं और फिर से प्रयास करते हैं। आज के युग में विद्यार्थियों के सामने अनेक आकर्षण हैं, जो उन्हें उनके लक्ष्य से भटका सकते हैं। मोबाइल फोन, सोशल मीडिया और अनावश्यक मनोरंजन उनके समय और ऊर्जा को नष्ट कर देते हैं। जो विद्यार्थी इनसे दूरी बनाकर अपने उद्देश्य पर ध्यान केंद्रित करते हैं, वही आगे चलकर सफल और आत्मनिर्भर बनते हैं। इसलिए प्रत्येक विद्यार्थी को चाहिए कि वह स्पष्ट लक्ष्य बनाए और निरंतर परिश्रम करता रहे।

(क) लक्ष्यवान विद्यार्थी की क्या विशेषताएँ बताई गई हैं?

(ख) विद्यार्थी जीवन में लक्ष्य निर्धारण क्यों आवश्यक है?

(ग) असफलता मिलने पर विद्यार्थियों को क्या करना चाहिए?

(घ) आज के युग में विद्यार्थियों का ध्यान किन कारणों से भटकता है?

(ङ) उपर्युक्त गद्यांश का उचित शीर्षक लिखिए।

लेखन कौशल

प्रश्न 1. निम्नलिखित में से किसी एक विषय पर मन में आए विचारों को संवाद रूप में लिखिए:-

(क) मोबाइल फोन का सही उपयोग के विषय में चर्चा करते हुए पुत्र/पिता और पुत्री के बीच संवाद।

(ख) पर्यावरण संरक्षण विषय पर दो मित्रों के बीच संवाद।

प्रश्न 2. निम्नलिखित में से किसी एक विषय पर 90 से 100 शब्दों में अनुच्छेद लिखिए:-

- “जहाँ चाह वहाँ राह”

संकेत बिंदु :- लोकोक्ति का अर्थ

लक्ष्य निर्धारण और प्रयास

विद्यार्थी जीवन में महत्व

कठिनाई का सामना और समाधान

सफलता प्राप्ति



- मित्रता और सहयोग

संकेत बिंदु :- मित्रता का महत्व

अच्छे मित्र की पहचान

सहयोग और समझदारी

विद्यार्थी जीवन में योगदान

नैतिक शिक्षा और सीख

MATHS

Q1. Express each of the following in standard form:

- a. 3,27,88,00,00,00,00,000
- b. The diameter of the sun is 1,40,00,00,000 m.

Q2. Express each of the following in usual form:

- a. 9.001×10^4
- b. 63.85×10^8
- c. 3.100543×10^3

Q3. A tourist group visiting from Delhi to Andaman and Nicobar Islands planned to travel by ferry and bus. The ferry ticket cost ₹1200 more than the bus ticket. The total cost of one ferry ticket and one bus ticket together was ₹10,000.

Q4. A souvenir shop in the Andaman and Nicobar Islands sold keychains and postcards. The cost of a keychain was ₹40 more than the cost of a postcard. A tourist bought 2 keychains and 3 postcards for ₹460.

Q5. Find the value of the following algebra expression for $a = 1$ and $b = 2$.

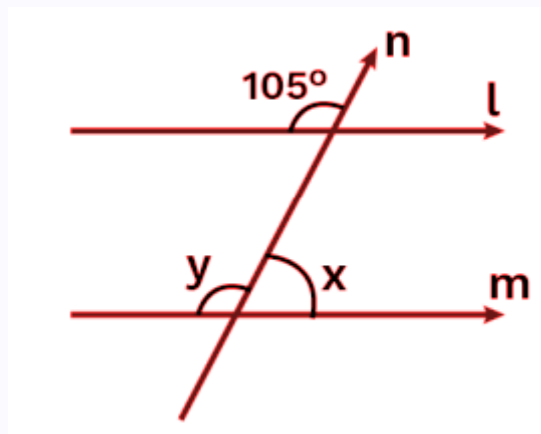
- a. $16a^2b + 7b^2 - 3a$
- b. $6ab^2 - 7a^2b + 8ab$

Q6. Subtract the sum of $5x^3 + 2x^2 - 5$ and $15x - x^3 - 2x^2$ from the sum of $9 + 7x - 3x^2$ and $4x - 7 - 2x^3$.

Q7. Two angles are supplementary. The measure of one angle is twice the measure of the other. Find the measure of both angles.



Q8. Find the value of x and y in the following figure:



Q9. The angles of a triangle are $(x + 10)^\circ$, $(2x - 20)^\circ$, and $(3x)^\circ$. Find the value of x and the angles.

Q10. The sides of a right-angled triangle are in the ratio 5 : 12 : 13. If the perimeter is 60 cm, find the length of each side.

Q11. A boy walks 15 m east and then 8 m north. How far is he from his starting point?

Q12. The length of a rectangle is 5 cm more than its breadth. If the perimeter is 50 cm, find its dimensions.

Q13. Which is smaller : $2^2 \times 5$ or $(5^2)^2$?

Q14. Simplify: $[(3^6)^2 \times 3^4] \div 3^{12}$

Q15. If an exterior angle of a triangle is 116° and an interior opposite angle is 68° , find the other angles of the triangle.

SCIENCE

Q1. Fill in the blanks

- a) The male reproductive part of a flower is called _____.
- b) Fusion of male and female gametes is called _____.
- c) In animals, the circulatory system helps in the transportation of oxygen and nutrients through the _____.



d) In animals, the process of removing waste products like urea is called _____.

Q2. One-word answer

- a) Name the type of asexual reproduction in which a new plant grows from the stem of the parent plant.
- b) In plants, the process of water movement from roots to leaves is called _____
- c) The chamber of the heart that pumps oxygenated blood to the body is the _____
- d) The chamber of the heart that pumps oxygenated blood to the body is the _____
- e) The large blood vessel that carries oxygen-rich blood from the heart to the body is the _____

Q3. Case based study questions :

Ravi, a 13-year-old, loves playing sports. However, after running for just a few minutes during a game of football, he starts feeling extremely tired, and his heart rate becomes very fast. He experiences shortness of breath and has to take a break to catch his breath.

His coach, noticing this, takes him to a doctor, who suggests that Ravi might have a problem with his heart or blood circulation, which makes it difficult for his body to get enough oxygen during physical activities.

- a) What could be the possible cause of Ravi's symptoms?
- b) Which part of the heart is responsible for pumping oxygenated blood to the rest of the body, and how might it be involved in Ravi's condition?
- c) What lifestyle changes or treatments might help Ravi with his condition?

Q4. Assertion–Reason

Assertion (A): A car moving in a straight line at constant speed shows uniform motion.

Reason (R): In uniform motion, equal distances are covered in equal intervals of time.

- a) Both A and R are true and R explains A
- b) Both A and R are true but R does not explain A
- c) A is true, R is false



d) *A is false, R is true*

Q5. Numericals :

- a) A bus covers a distance of 240 km in 6 hours. Calculate its speed.
- b) A car travels 200 meters east in 20 seconds. What is its velocity?
- c) A person walks 30 meters north, then 40 meters east, and finally 50 meters south. If the total time taken for the journey is 30 seconds, what is the average speed of the person?

Q6. Plot a Distance–Time Graph and mention the type of motion is shown in the graph.

| | | | | | | |
|---------------------------|---|---|----|----|----|----|
| Distance moved (m) | 0 | 5 | 10 | 15 | 20 | 25 |
| Time (minutes) | 0 | 1 | 2 | 3 | 4 | 5 |

Q7.State True or false and correct the given statement :

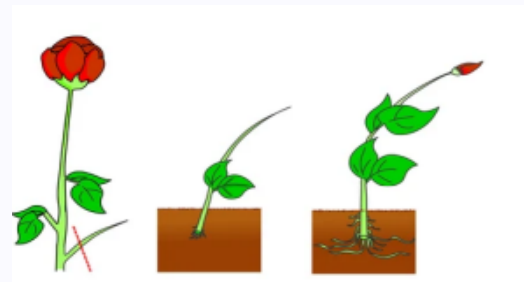
- a) The heart pumps oxygenated blood into the veins.
- b) Red blood cells carry oxygen to the body's cells.
- c) Asexual reproduction in plants involves the fusion of male and female gametes.
- d) In asexual reproduction, offspring are genetically identical to the parent plant.
- e) Fruits and seeds are produced only in asexual reproduction.

Q8. Draw the well labeled diagram of :

- a) Human Heart
- b) Excretory System
- c) Fragmentation

Q9. Observe the diagram and answer the following questions :

- a) Identify the given process .
- b) Explain the given process with examples.



Q10. Multiple Choice Questions (MCQs):

1. Which of the following is a characteristic of acids?

- a) *They taste bitter*
- b) *They turn blue litmus paper red*
- c) *They feel slippery*
- d) *They turn red litmus paper blue*

2. Which of the following is an example of a base?

- a) *Vinegar*
- b) *Sodium hydroxide (NaOH)*
- c) *Hydrochloric acid (HCl)*
- d) *Citric acid*

3. Which of the following is NOT a function of forests?

- a) *Preventing soil erosion*
- b) *Regulating the water cycle*
- c) *Producing oxygen and absorbing carbon dioxide*
- d) *Providing metals like iron and copper*

4. Deforestation leads to _____.

- a) *Increased biodiversity*
- b) *Loss of habitat for animals*
- c) *Increased rainfall*
- d) *Growth of more forests*


5. Which of these is an effect of deforestation on the environment?

- a) *Improved soil fertility*
 - b) *Decreased carbon dioxide in the atmosphere*
 - c) *Increased biodiversity*
 - d) *Increased global warming*
-



SOCIAL SCIENCE

● ART-INTEGRATED PROJECT

 **TASK:** Make a colourful presentation on A4 sized sheets to display the topics given below on “*Comparative Study of Delhi, Lakshadweep Islands, and Andaman and Nicobar Islands*’ Transport and Connectivity Comparison.

FOCUS POINTS:

- DANCES
- FESTIVALS & CULTURAL PRACTICES
- TRANSPORTATION

ASSIGNMENT

A. Assertion–Reason Questions

Q1. Assertion (A): Media plays an important role in strengthening democracy.

Reason (R): Media helps people to get information about government policies and public issues.

- a) Both A and R are true and R is the correct explanation of A
- b) Both A and R are true but R is not the correct explanation of A
- c) A is true but R is false
- d) A is false but R is true

Q2. Assertion (A): The Sahara Desert has very little vegetation.

Reason (R): The Sahara Desert receives very low rainfall throughout the year.

- a) Both A and R are true and R is the correct explanation of A
- b) Both A and R are true but R is not the correct explanation of A
- c) A is true but R is false
- d) A is false but R is true

B. HOTS (Higher Order Thinking Skills)

Q3. How can misleading advertisements affect the thinking and choices of people in a democratic society?

Give your opinion.



Q4. People have adapted their lifestyle to survive in desert regions. Explain how human adaptation helps in overcoming harsh climatic conditions.

C. Case-Based Question

Q5. Case Study: In a desert region, people wear loose cotton clothes, live in houses made of mud, and depend on animals like camels for transport. At the same time, television and newspapers are the main sources of information for people living there.

- a) Why do people in deserts prefer loose cotton clothes?
 - b) Name one animal commonly used for transport in deserts and state why it is suitable.
 - c) How do media sources like television and newspapers help people in a democracy?
-

FRENCH

COMPRÉHENSION ÉCRITE

Louane présente ses amis.

Emilie est ma meilleure amie. Emilie est grande et belle. Elle est mince avec un visage ovale. Elle est souriante. Elle est travailleuse

Damien est petit et mignon. Il a des cheveux noirs et des yeux bleus. Parfois, il est malicieux et il fait des bêtises dans la classe.

Noémie est charmante et super intelligente. Elle a un visage rond et sympa. Elle a des yeux bleus. Elle est toujours contente. Elle finit ses devoirs très vite.

Et voilà mon ami Raphaël. Il est paresseux. Il est grand et fort. Il aime jouer au football, Il n'aime pas étudier

Aussi ! J'ai une nouvelle amie. Elle vient d'Espagne. Elle s'appelle Sofia. Elle est trop jolie. Elle a les cheveux bruns et les yeux verts, Elle chante très bien !

I. Lis le texte et réponds aux questions: (Read the text and answer the questions)

- a) Qui est travailleuse?
- b) Qui fait des bêtises dans la classe ?
- c) Qu'est-ce que Raphaël aime ?



II. Trouve du texte (Find the answer from the text)

- a) Un autre mot pour heureuse»
- b) Le contraire de 'grand' et 'blanc'.

III. Complète la phrase avec un mot du texte: (Complete the sentence with a word from the text)

- a) Ma sœur réussit toujours ses examens. Elle est.....
- b) Mon frère dort toute la journée. Il est
- c) Le garçon joue au.....
- d) Je vais en en vacances.

IV. Coche la bonne réponse: (Tick the correct answer)

- a) Emilie est.....
 - i. grande ii. Petite iii. mignonne
- b) Noémie a des yeux.....
 - i. bleus ii. Noirs iii. bruns
- c) Sofia a les cheveux.....
 - i. bleus ii. Noirs iii. bruns

PRODUCTION ÉCRITE

Décrivez à votre ami/amie cinq endroits que vous visitez souvent en 60 – 70 mots. (Describe to your friend five places you visit often)

.....

.....

.....

.....

.....



संस्कृत


प्रश्न1-- अधोलिखित गद्यांश पठित्वा प्रश्नान उत्तराणी लिखत ।

स्वामी दयानन्दः एकः महापुरुषः आसीत् । तेषां महोदयानां जन्म गुजरात प्रदेशे टंकारा नामके नगरे अभवत् । तेषां महोदयानां बाल्यकालस्य नाम मूलशङ्करः आसीत् । ते सर्वप्रथमः आर्यसमाजस्य स्थापना मुम्बई नामके महानगरे अकुर्वन् । तेषां पितुर्नाम श्री कर्षणदासः आसीत् । स्वामी दयानन्दस्य गुरोः नाम स्वामी विरजानन्द आसीत् । स्वामी दयानन्द उत्तर प्रदेशे मथुरा नामके नगरे संस्कृत व्याकरणं अपठत् । स्वामी दयानन्दः संपूर्णजीवने वेदानां प्रचार प्रसारं अकरोत् । कुरीतीनां निवारणाय च इतस्ततः अभ्रमत् ।

ते स्त्री शिक्षायाः विधवा विवाहस्य सर्वदा समर्थनं अकुर्वन् ।

एकपदेन उत्तरत

1. महापुरुषः कः आसीत् ?
2. स्वामी दयानन्दस्य जन्म कुत्र अभवत् ?
3. स्वामी दयानन्दस्य गुरोः किं नाम आसीत् ?
4. मूलशङ्कर कस्य नाम आसीत् ?



पूर्णवाक्येन उत्तरत

1. कः वेदानां प्रचारं अकरोत् ?

2. स्वामी दयानन्दः कस्य स्थापना अकरोत् ?

अस्य गद्यांशस्य उचितं शीर्षकं लिखत

निर्देशानुसारं उत्तरत

1. एकं अव्ययशब्दं गद्यांशात् चित्वा लिखत ।

(क) जन्म (ख) नाम (ग) इतस्ततः

2. स्वामी दयानन्दः अस्य विशेषणं लिखत ।

(क) दया (ख) दयानन्द (ग) स्वामी

3. अभ्रमः इति क्रियापदस्य कर्तृपदं किम् ?

(क) स्वामी विरजानन्दः (ख) स्वामीदयानन्द (ग) मथुरा

4. स्वामी विरजानन्दः इति कर्तृपदस्य क्रियापदं किम् ?

(क) आसीत् (ख) अभवत् (ग) अपिबत्

प्रश्न2- निम्न चित्रम् दृष्ट्वा संस्कृतेन वाक्येन लिखत ।



This image shows a single sheet of white paper with horizontal blue ruling lines. The lines are evenly spaced and run across the width of the page. There are no margins, text, or other markings on the paper.

Q1. Write the program to input your name from the user and print it 20 times using for loop.

Q2. Write a program to print all odd numbers between 50 to 200 .

Q3. Write a program to generate a multiplication table of 10.

Q4. Find errors in the following codes and rewrite them.

$$i=i+1$$



```
c)for i in range (1,55 2)
    If number%2==0
        Continue
    Print number
```

Q5. Write the output of the following code:-

```
a)count=10
```

```
While count>0:
```

```
    print(count)
```

```
    count-=1
```

```
b)list=[91,92,93,94,95,99,100,101]
```

```
for i in range(0,8,2):
```

```
    print(list[i])
```

```
c)fruits=[11,12,13,14,15,16]
```

```
for i in range(0,6,2):
```

```
    print(fruits[i])
```



Happy New Year

"As we welcome 2026,
let's celebrate
the power of education
to transform lives."



Contact : 8588822255 | 9205928881

Email: vspkschool@yahoo.co.in | Web: www.vspkinternational.edu.in

