



VSPKTM
INTERNATIONAL SCHOOL
Sector-13, Rohini, New Delhi-110085



HAPPY HOLIDAYS

SESSION 2025-26

**"In the Chills of winter,
let the learning continue."**





Message from Principal

Dear Parents and Students,

Let this time of the year be significant in recreating family bonds, rejuvenating ourselves and creating memories that will last for long. Along side the family vacation, it is imperative to make the students invest their time in enhancing their skills and aptitude, the school has specially designed theme based practice sheets for each grade to enhance the critical thinking ability of the students. We are certain that each one of you will fetch the maximum benefits out of it. We hope that the time spent with near and dear ones would infuse revived energies. Eagerly waiting to see you all back on **12th January 2026.**

**Wish you all a very
Happy Winter Time!**





Dear Student

Vacation is a time to pause, reflect, explore and grow. To support balanced development, **VSPK International School** will observe Winter Vacation from **1st January 2026 to 11th January 2026**. However, learning does not stop during holidays--it simply takes a new form. The Holiday practice sheet designed for you is an experiential learning journey, not a routine task. It encourages a learning continuum during vacation.

Through these activities, you will: Strengthen critical thinking and problem-solving skills, enhance creativity, communication and imagination, apply classroom concepts to real-life situations. You are encouraged to work independently, take ownership of learning and enjoy discovering new ideas at your own pace.

Dear Parent

As we step into a new year, this winter break provides an excellent opportunity to nurture competency-based learning, well-being and life skills at home.

We request your cooperation in encouraging your child to:

- ❖ Follow healthy self-care routines and hygiene practices
- ❖ Participate in physical activities and outdoor play for fitness and emotional well-being
- ❖ Choose nutritious, homemade food and understand healthy living habits
- ❖ Explore hobbies, reading, art, music, or innovation-based activities
- ❖ Identify and strengthen core skills such as reading fluency, writing expression, numeracy, communication and handwriting
- ❖ Revise key concepts to ensure continuity, retention and readiness for the next learning phase

This integrated approach supports learning outcomes, builds confidence and nurtures responsible, reflective and skilled learners.

Submission Date: 15th January 2026

We wish our students a vacation filled with curiosity, creativity, joyful learning and family bonding.

Wishing you and your family a happy and prosperous new year 2026.

Warm regards,

VSPK International School



English
(Assignment 1)

Q1 Answer the following questions .

a)What do the birds in the jungle want to start ?

b) What is a newspaper ?

c) Name the main characters of the play 'Croak'.

Q2 Scramble the unscramble words .

ORFG - _____

ORSTK- _____

JEPE- _____


Q3 Write meanings of the words given

a)hopping - _____

b)safari - _____

c)tweet- _____


Q4 Look at the picture and write three lines on it .



1. _____

2. _____

3. _____



Assignment-2

Q5 Look at the pictures and fill in the blanks with correct prepositions using the help box.

On, in ,near , under , between ,behind



Where is the cat?

The cat is _____ the table.



Where is the cat?

The cat is _____ the box.



Where is the ball?

The ball is _____ the car.



Where is the sharpener?

It is _____ the school bag.



Where is the rabbit?

The rabbit is _____ the tree.



Where is the cow?

The cow is _____ the tree.



Where is the teacher?

The teacher is _____ the staplers.



Handwriting Practice - 1

★ I drink milk everyday.

1.

2.

3.

4.

5.



Handwriting Practice - 2

★ I sleep early at night.

1.

2.

3.

4.

5.



Handwriting Practice-3

★ I do my homework daily.

1.

2.

3.

4.

5.



Handwriting Practice - 4

★ I keep my books neatly.

1.

2.

3.

4.

5.



Handwriting Practice - 5

★ I greet elders with respect.

1.

2.

3.

4.

5.



हिंदी कार्य पत्रिका – 1
(ओ, औ मात्रा तथा चित्र वर्णन)

प्रश्न 1. चित्र देखकर शब्द भरो

–

(क) एक _____



था ।

(ख) _____



पेड़ पर बैठा है ।

(ग) उसकी मित्रता _____



से थी ।

(घ) _____



नदी में तैर रही है ।

(ङ) _____



ने टोकरी चुरा ली ।

(च) गौरी _____



लगा रही है ।

प्रश्न 2. रिक्त स्थान भरो –

(क) यह दूध की _____

है। (बोतल/ बौतल)

(ख) नानी एक _____

लाई। (खिलोना/ खिलौना)

(ग) _____

घास खा रहा था। (घोड़ा/घौड़ा)

(घ) रमा _____

लाई। (अखरौट /अखरोट)



कार्य पत्रिका – 2

प्रश्न 3. ' ओ ' तथा ' औ ' की मात्रा वाले शब्द अलग-अलग करके लिखो –

नौ सौ चूहे जब दौड़ कर आए , बिल्ली जी ने खूब उड़ाए।

नौकर बाज़ार से लाया खोया , खाकर खोया हाथ जो धोया।

पेट ने खूब मचाया शोर , रोते – रोते हो गई भोर।

दवाई खूब खानी पड़ी , झाड़ भी बिल्ली से खूब पड़ी

ओ – _____

औ – _____

प्रश्न 4. चित्र वर्णन –

चित्र देखकर चार वाक्य बनाए।



1. _____

2. _____

3. _____

4. _____



सुलेख - 1

★ मेहनत का फल मीठा होता है।

1.

2.

3.

4.

5.



सुलेख - 2

★ कौशिक करने वालों की कभी हार नहीं होती।

1.

2.

3.

4.

5.



सुलेख-3

★ हमें सदा सच बोलना चाहिए।

1.

2.

3.

4.

5.



सुलेख-4

★ हमें अपना काम समय पर पूरा करना चाहिए।

1.

2.

3.

4.

5.



सुलेख-5

✽ हमें सबकी मदद करनी चाहिए।

1.

2.

3.











4.

5.



SUBJECT - EVS
TOPIC - AIR AND WATER
Assignment -1

Q1 Observe the pictures and write the names.

Well	Rain	River	Sea	Lake
Drinking	Washing clothes	Cleaning	Cooking	Washing Utensils
				
				
				



Assignment -2

A. Circle the odd one out:

1. (a) wind (b) breeze (c) storm (d) water
2. (a) stone (b) balloon (c) football (d) tyre
3. (a) lakes (b) well (c) hand pump (d) sea
4. (a) reading (b) cooking (c) bathing (d) drinking

B. Fill in the blanks with a correct option:

filtering stomata rain space breeze boiling underground

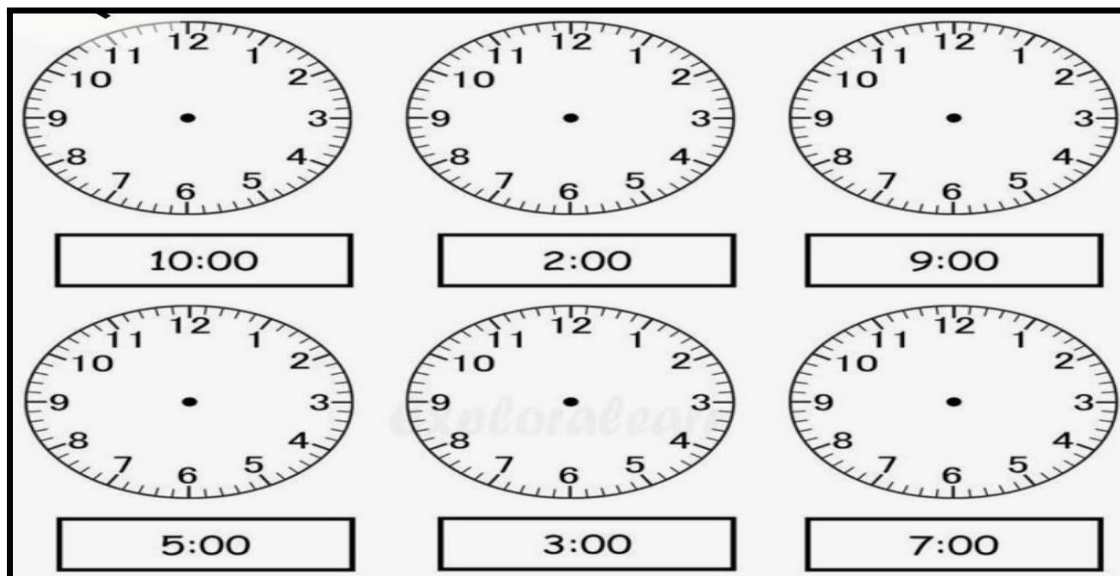
- (a) Plants take in air through tiny holes called _____.
- (b) Wind that blows gently is called _____.
- (c) Air occupies _____.
- (d) _____ is the main source of water on earth.
- (e) Rain water that seeps into the ground is called _____ water
- (f) Tap water can be cleaned by _____ and _____.

C. Put (✓) on the activities that pollute air.

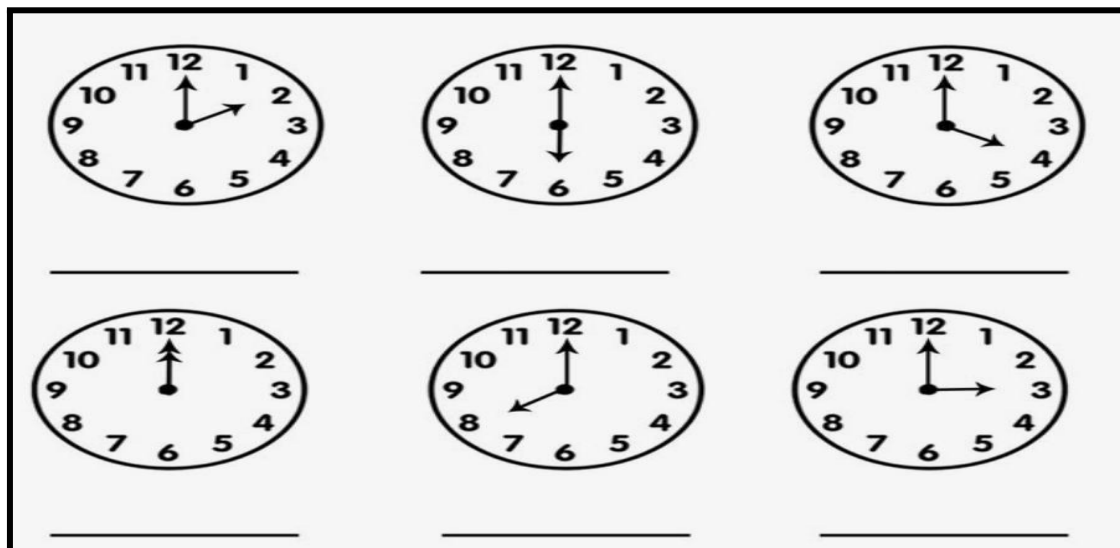
☐☐☐☐☐

SUBJECT - MATHS
TOPIC - Time and Calendar, Multiplication,
Addition and Subtraction

Q1) Draw hands of the clocks to show the given time.



Q2) Write the time shown in the following clocks.



Q3). Answer the following questions based on the following calendar.

2026		JANUARY				2026
SUN	1st New Years Day	4	11	18	25	
MON	13rd Lohri 14th Makar Sankranti	5	12	19	26	
TUE	23rd Vasant Panchami	6	13	20	27	
WED	26th Republic Day	7	14	21	28	
THU	1	8	15	22	29	
FRI	2	9	16	23	30	
SAT	3	10	17	24	31	

- a) Which month is shown in the above calendar? _____
- b) How many days are there in January ? _____
- c) How many Saturdays are there in it? _____
- d) Which day falls on 26th January? _____
- e) Which month comes after January? _____



Assignment -2

Q4) Solve the following.

$$\begin{array}{r} 79 \\ - 41 \\ \hline \\ \hline \end{array}$$

$$\begin{array}{r} 80 \\ + 15 \\ \hline \\ \hline \end{array}$$

$$\begin{array}{r} 54 \\ - 22 \\ \hline \\ \hline \end{array}$$

$$\begin{array}{r} 32 \\ + 54 \\ \hline \\ \hline \end{array}$$

$$\begin{array}{r} 53 \\ + 34 \\ \hline \\ \hline \end{array}$$

$$\begin{array}{r} 57 \\ - 34 \\ \hline \\ \hline \end{array}$$

$$\begin{array}{r} 74 \\ + 24 \\ \hline \\ \hline \end{array}$$

$$\begin{array}{r} 55 \\ - 03 \\ \hline \\ \hline \end{array}$$

$$\begin{array}{r} 91 \\ - 50 \\ \hline \\ \hline \end{array}$$

$$\begin{array}{r} 45 \\ + 34 \\ \hline \\ \hline \end{array}$$

$$\begin{array}{r} 57 \\ - 13 \\ \hline \\ \hline \end{array}$$

$$\begin{array}{r} 19 \\ + 40 \\ \hline \\ \hline \end{array}$$

Q5) Dodging table.

- $2 \times 4 =$ _____
- $3 \times 9 =$ _____
- $2 \times 7 =$ _____
- $10 \times 8 =$ _____
- $5 \times 6 =$ _____
- $3 \times 3 =$ _____
- $2 \times 10 =$ _____
- $2 \times 2 =$ _____
- $10 \times 4 =$ _____
- $5 \times 5 =$ _____



Happy New Year

"As we welcome 2026,
let's celebrate
the power of education
to transform lives."



Contact : 8588822255 | 9205928881

Email: vspkschool@yahoo.co.in | Web: www.vspkinternational.edu.in



Instagram



Facebook



Website



Location